

MATRICULATION AND SECONDARY EDUCATION CERTIFICATE EXAMINATIONS BOARD
UNIVERSITY OF MALTA, MSIDA


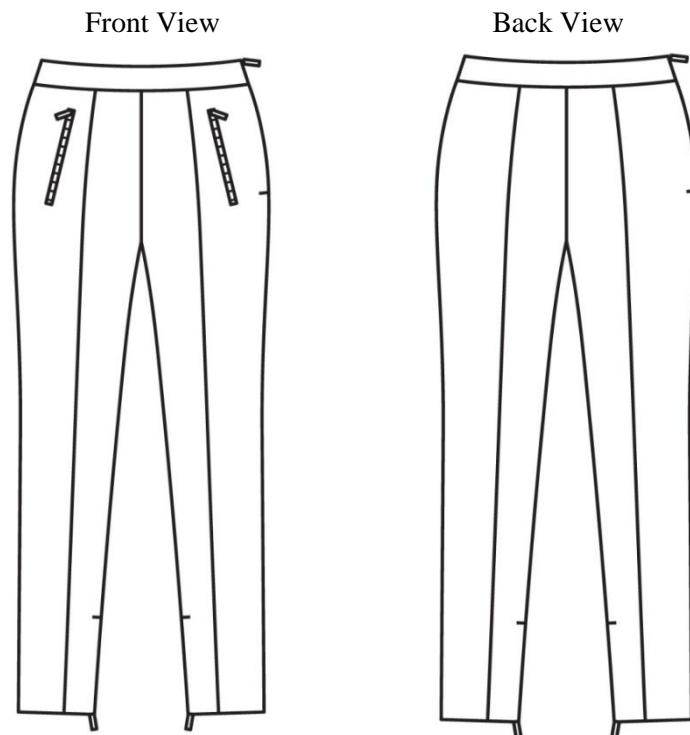
SECONDARY EDUCATION CERTIFICATE LEVEL

MAY 2017 SESSION

SUBJECT:	Textiles and Design
PAPER NUMBER:	I
DATE:	9 th May 2017
TIME:	9:00 a.m. to 11:05 a.m.

Answer **ALL** questions.

1. An economical and workable closet requires timeless trousers styles that cover a woman’s major daily activities all year round. The following diagram shows the front and back view of a pair of trousers.



(Source: *Burdastyle 9/2016*)

- a) Point out **THREE** fashion features found on the trousers.

- i) _____ (½)
- ii) _____ (½)
- iii) _____ (½)

This question continues on next page.

b) For which body figure would this type of trousers be suitable? Give **ONE** reason for your answer.

• Type of body figure: _____ (1)

• Reason: _____
_____ (2)

c) Name **ONE** occasion where this trousers could be worn. _____ (1)

d) Suggest **ONE** type of fabric and **ONE** colour that can be used to make the trousers. Give **ONE** reason for your answer.

• Fabric type: _____ Colour: _____ (1)

• Reason: _____
_____ (2)

e) Suggest **ONE** type of machine needle and **ONE** type of thread suitable to sew the above trousers. Give **ONE** reason for your answer.

• Type of machine needle: _____ (1)

• Type of thread: _____ (1)

• Reason: _____
_____ (2)

f) List **TWO** sewing notions needed to make this trousers.

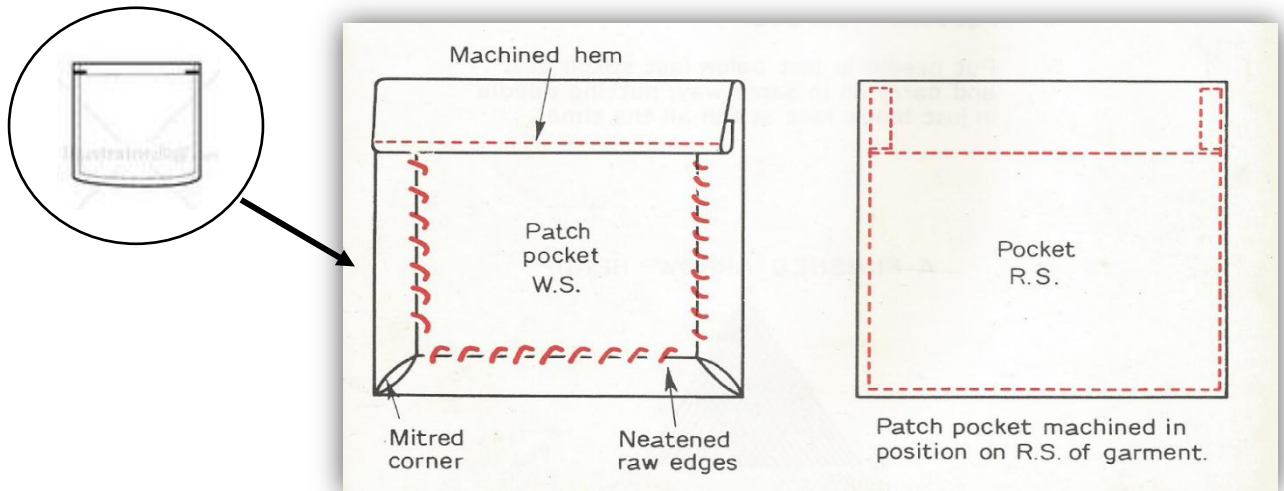
• _____ (1)

• _____ (1)

g) Name the type of pocket that is found on this pair of trousers.

Type of pocket: _____ (1)

h) Another type of pocket is the patch pocket. With the help of the following diagrams, explain in **FIVE** steps how to work and attach the following pocket.



(Source: Needlework Notebook)

- _____ (1)
- _____ (1)
- _____ (1)
- _____ (1)
- _____ (1)

i) One of the fastenings used to make this pair of trousers is a zip. With the help of diagrams, explain in **THREE** steps how to sew a zip to the side seam.



This question continues on next page.

(3, 3)

j) Name a suitable and different fastener for the following:

- a winter coat: _____ (½)
- a biker's leather jacket: _____ (½)
- a toddler's top: _____ (½)

k) List **TWO** types of permanent stitches which should be used to neaten the edges of the seam allowance.

- _____ (1)
- _____ (1)


l) Suggest **ONE** type of hem one should use when finishing off this trousers. Give **ONE** reason for your answer.

- Hem type: _____ (1)
- Reason: _____
_____ (2)

m) Sketch a top/shirt that can be worn with this pair of trousers.



Front View



Back View

(2)

(Total: 35 marks)

2. Pattern magazines are an essential tool for creating and sewing desired clothes.

a) i) List **TWO** important points you need to check in the instructions before you choose the right sheet and pattern.

- _____ (½)
- _____ (½)









(Source: www.google.com.mt)

ii) Suggest how one should decide the size of the pattern.

_____ (1)

b) i) Name the following pattern markings that are usually found on pattern magazines.

(3)

This question continues on next page.

Pockets	Waistband
---------	-----------

(5,1)

iii) Explain **ONE** way how you can identify the right side from the wrong side of fabric.

_____ (1)

iv) What advice should be given when placing the pattern on:

• a checked fabric: _____
 _____ (1)

• a fabric with a pile: _____
 _____ (1)

• a fabric with a one-way design: _____
 _____ (1)

d) i) Skirt A is neatened using a waistband. Why is it important to insert a layer of interfacing in the waistband?

 _____ (1)

ii) The diagram below represents a straight waistband on the wrong side (WS). On the diagram:

- shade the area where the interfacing should be placed
- draw the *foldline* of the interfacing



(WS)

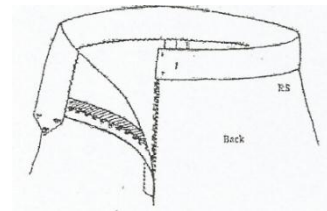
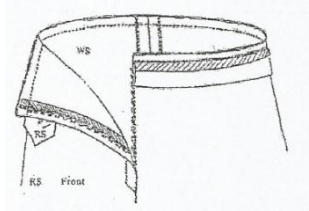
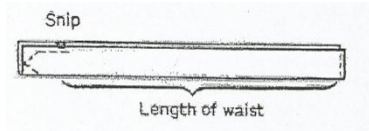
(1/2, 1/2)

This question continues on next page.

iii) An iron-on interfacing was used for the waistband. Give **TWO** tips for a good and neat result.

- _____ (1)
- _____ (1)

iv) With the help of the following diagrams, fill in the method of how to sew the waistband to the skirt.



- Cut _____ (measurement of waist + 8cm) and interfacing (vilene) same measurement as finished band.
- Tack onto W.S. band. Machine stitch overlapping end to form point and one straight end. Trim away extra fabric. Turn to _____. Press. _____ and machine band onto fitting line of trousers so that pointed end sticks out and overlaps right over left. Trim away extra _____. Turn band over to outside.
- Turn a _____ along seam line of band. Tack and machine in position so that it covers line of stitching showing through W.S. Finish off. Add a fastening. (5)

e) i) Name **ONE** suitable fabric for skirt B. Give a reason for your answer.

Fabric: _____ (1)

Reason: _____

_____ (2)

ii) Give **ONE** reason why pressing is important when working pleats.

_____ (1)

(Total: 35 marks)


3. The blouse is a basic garment found in every woman’s wardrobe.



(Source: www.google.com.mt)

a) i) Identify the type of collar used on this blouse. _____ (1)

ii) Look at the following types of collars and match with the correct name.




Peter Pan	
Notched	
Chelsea	
Tuxedo	
Sailor	
Shawl	

(3)

(Source: www.google.com.mt)

b) Name the type of sleeve used on this blouse.



(1)

This question continues on next page.


c) i) Explain the difference between a set-in sleeve and a dropped sleeve.

_____ (2)

ii) Give **ONE** example of garments where dropped sleeve is used.

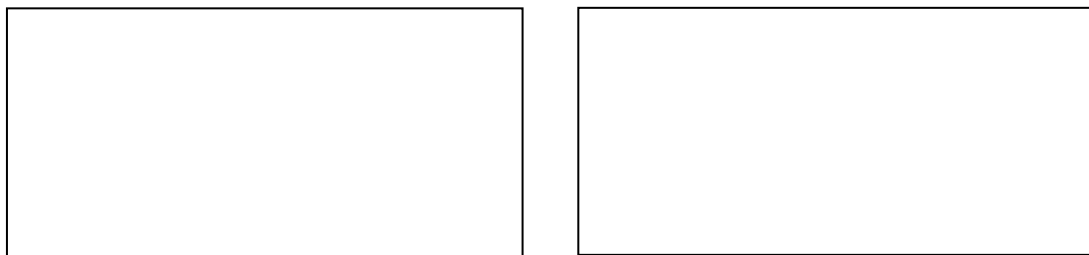
_____ (1)

iii) In the box below, draw the pattern of a dropped sleeve.



(2)

iv) Using diagrams, explain the **FOUR** steps how to attach a dropped sleeve.



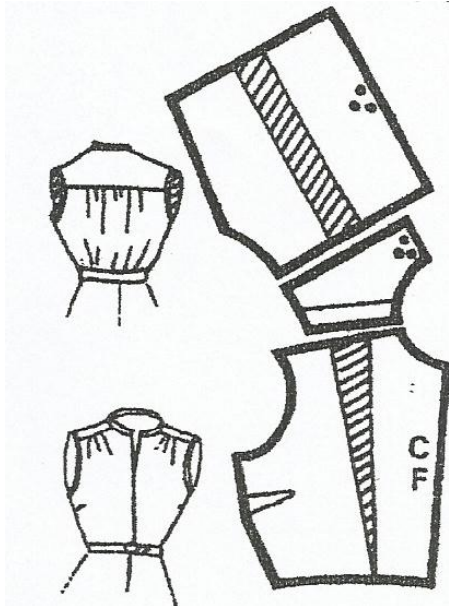
(2)

- _____ (1/2)
- _____ (1/2)
- _____ (1/2)
- _____ (1/2)

d) i) Identify the method used to add fullness to the blouse.

_____ (1)

ii) One method of adding fullness to a blouse is by adding a yoke. By referring to the diagram below, put the steps of how to add a yoke, in order.



Cut the pattern out.	
For the back fullness cut the back pattern in half from the waist to the yoke end.	
Cut the pattern through from the yoke and almost to the waist. Spread the require amount at the yoke end and paste paper behind.	
Place the back and front shoulders together and pencil round them on a piece of paper. Draw in the yoke. There is now no shoulder seam.	1
Paste a strip of paper in the cut to give the desired amount of fullness.	

(4)

(Total: 19 marks)

Please turn the page.

4. “Far too much fashion ends up in landfills as every year thousands of tonnes of textiles are thrown away with household waste.

As much as 95% of clothes thrown away could have been re-worn or recycled.” (H&M Group, 2016). Recycling and renovating clothes can solve this problem.

a) i) What is the purpose of renovating garments?

_____ (2)

ii) List **TWO** points to observe when renovating garments.

- _____ (1)
- _____ (1)

b) List **FOUR** examples of how one can renovate garments for children.

- _____ (1)
- _____ (1)
- _____ (1)
- _____ (1)

c) Suggest **THREE** ways how one can care for garments daily in order to preserve them more.

- _____ (1)
- _____ (1)
- _____ (1)

(Total: 11 marks)

MATRICULATION AND SECONDARY EDUCATION CERTIFICATE EXAMINATIONS BOARD
UNIVERSITY OF MALTA, MSIDA

SECONDARY EDUCATION CERTIFICATE LEVEL

MAY 2017 SESSION

SUBJECT:	Textiles and Design
PAPER NUMBER:	IIA
DATE:	11 th May 2017
TIME:	4:00 p.m. to 6:05 p.m.

Answer **ALL** questions.

SECTION A (40 marks)

1a. Steam irons are a useful appliance in the home. Identify **TWO** uses of steam irons.

- _____
- _____ (2)

b. To ensure safety and care, suggest **ONE** practice that should be followed when:

i) using a steam iron;

_____ (1)

ii) storing a steam iron.

_____ (1)

(Total: 4 marks)

2a. Name the sewing machine attachments that are suitable for the following purposes:

Purpose	Name of attachment
To sew a zip	
To neaten the edges of a seam	

(1)

b. Give **TWO** guidelines that tailors should consider when using a button hole foot.

- _____
- _____ (2)

(Total: 3 marks)

3a. Define natural fibres, and give **TWO** examples.

Definition: _____

Example 1: _____ Example 2: _____ (2)




b. Compare the benefits of buying cotton socks over polyester socks in terms of:

i) health; _____

ii) environment. _____

_____ (2)

c. A pair of cotton socks have the labels below. Explain the meaning of **EACH** label.

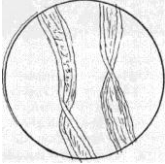
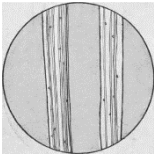
 <i>Source: www.ec.europa.eu/</i>	<p>Meaning: _____</p> <p>_____</p>
 <i>Source: www.siebenblau.de</i>	<p>Meaning: _____</p> <p>_____</p>
 <i>Source: www.google.com</i>	<p>Meaning: _____</p> <p>_____</p>

(3)

d. Explain the benefit of mercerising cotton.

_____ (1)

e. Choose the microscopic view that represents cotton which has not been mercerised.

 <i>Source: www.chestofbooks.com</i>	 <i>Source: www.chestofbooks.com</i>
Diagram A	Diagram B

Answer: _____ (1)

f. Cotton can be given an easy care chemical finish.

i) Explain briefly the chemical treatment.

_____ (1)

ii) Give **ONE** advantage and **ONE** disadvantage of the easy care treatment.

Advantage: _____

Disadvantage: _____

_____ (2)

(Total: 12 marks)

4a. New fabrics such as phosphorescent textiles ‘glow in the dark’. With the aid of a diagram, suggest **ONE** way how these fabrics could be used in garments for a:

i) functional purpose; _____



This question continues on next page

ii) decorative purpose. _____



(2)

b. As illustrated below, geotextiles are widely used in engineered landfills. From an environmental point of view, explain **ONE** advantage of geotextiles.



Source: www.cirtex.co.nz

Advantage: _____

(1)

c. Polyester is used for geotextiles made of synthetic fibres. Outline **TWO** characteristics of polyester that make it suitable for this use.

- _____
- _____

(2)

d. Suggest a test that could be applied to polyester geotextile woven fabric to check if the fabric tears, giving **ONE** reason for choice.

Name of test	Reason for choice
_____	_____
_____	_____

(2)

(Total: 7 marks)

5. Observe the coat illustrated in the box below and answer the following questions:



a. Name of coat: _____ (1)

b. Name of pockets: _____ (1)

c. Name of sleeves: _____ (1)

d. Is it a single or a double-breasted coat? _____ (1)

e. What type of lining would you recommend to add warmth?
_____ (1)

f. Name the label attached to the coat, and explain its meaning.

_____ (2)

g. Outline **THREE** properties of wool that make it suitable for this coat.

- _____
- _____
- _____ (3)

h. What type of laundering care would you recommend? Why?
_____ (2)

This question continues on next page.

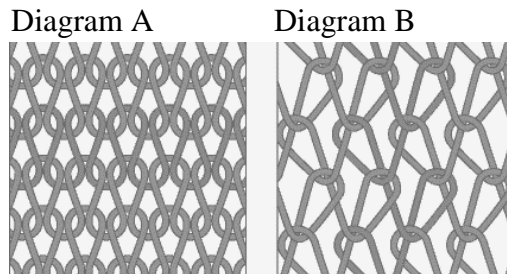
i. Suggest:

- **ONE** chemical fabric finish to prevent (pilling) balls from forming on the surface of the fabric. _____ (1)
- **ONE** chemical fabric finish to prevent the fabric from being attacked by insects.
_____ (1)

(Total: 14 marks)

SECTION B (60 marks)

6a. Warp knitting fabric is commonly used for sportswear. Which diagram represents warp knitting?



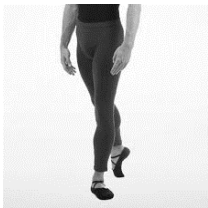

Source: www.quora.com

Answer: _____ (1)

b. Describe the construction of warp knitting.

_____ (1)

c. Observe the diagrams below, and discuss the positive factors of using warp knitting over weaving for the garments illustrated.

	
Source: www.planetdancedirect.co.uk	Source: www.polyvore.com
Factor 1: _____	
Factor 2: _____	

(2)

d. Name a type of sewing machine needle that is suitable for knitted fabrics.

Name of needle: _____ (1)

e. Name **TWO** types of sewing machine needles other than those you mentioned in part (d), and give their function.

Name: _____

Function: _____

Name: _____

Function: _____ (4)

f. List **TWO** guidelines that could be followed when sewing knitted fabrics.

Guideline 1: _____

Guideline 2: _____

_____ (2)

g. Name **ONE** seam that is suitable for sportswear. Give **ONE** reason to justify your choice.

Name of seam: _____


Reason: _____ (2)


h. Give **ONE** recommendation for securing shoulder seams from stretching.

_____ (1)

This question continues on next page.

i. Knitted fabric is also used for leisure wear. Draw and describe **TWO** design features that could be included to make a pair of trousers easy to put on and take off for a wheelchair user.

i)  _____

ii)  _____

(4)

j. Name **ONE** blended fabric that is suitable for the trousers mentioned in part (i). Give **ONE** reason for choice.

Name of fabric: _____

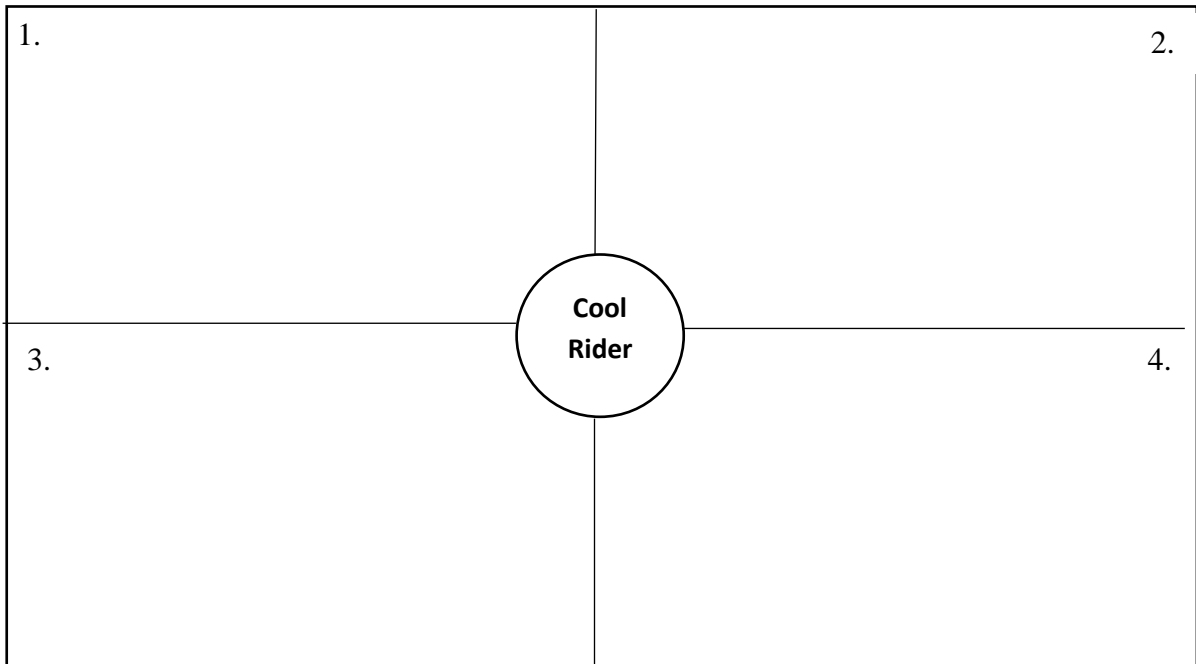
Reason: _____ (2)

(Total: 20 marks)

7. You are asked to design a mood board for a boys' caps and scarves collection, for low budgets and with the theme of a cool rider to promote sports such as cycling, skateboarding and wheelchair basketball.

a. Define a mood board.
_____ (1)

b. In the mood board below, draw **FOUR** ideas to develop the theme cool rider, and identify the aim of each idea.



Aim 1: _____

Aim 2: _____

Aim 3: _____

Aim 4: _____ (4)

c. Outline **ONE** design feature to assist persons with visual impairment to denote that they are wearing them properly.

_____ (1)

d. Are caps and scarves suitable for a haute couture or a prêt-à-porter collection? Why?

_____ (2)

This question continues on next page.

e. Discuss **FOUR** factors consumers could consider upon deciding whether to buy caps and scarves from boutiques or online stores.

- _____
- _____
- _____
- _____ (4)

f. Give **ONE** advantage and **ONE** disadvantage of using the following methods of payment:

i) Cash:

Advantage: _____

Disadvantage: _____ (2)

ii) Credit card:

Advantage: _____

Disadvantage: _____ (2)

iii) Cheque:

Advantage: _____

Disadvantage: _____ (2)

g. Suggest **ONE** safety precaution that should be observed when:

i) storing a credit card;

_____ (1)

ii) paying for articles using a credit card.

_____ (1)

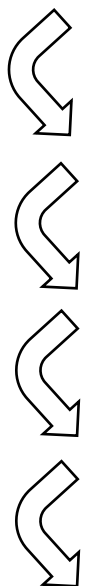
(Total: 20 marks)

8a. A local fashion house intends to present a fashion show with an oriental theme. The wall of the catwalk is going to be a textile mural made with batik. Define batik.

_____ (1)

b. Use the words in the box below, and fill-in the blanks to explain the process of batik.

removed	cloth	scraping	wax	dye-bath	water	second	heating
---------	-------	----------	-----	----------	-------	--------	---------



i) _____ is applied over the pencilled-in outline of the pattern.

ii) The _____ is dyed in the first dye bath. The area where the wax was applied in step (i) will remain white.

iii) _____ application of wax is applied.

iv) The cloth is dyed in the second _____.

v) All the wax applied is _____. This is done by _____ the wax and _____ it off and also by applying hot _____ and sponging off the remaining wax.

(4)

c. Name **TWO** tools that could be used to apply the wax onto the fabric.

_____ (1)

d. Explain **TWO** safety precautions that should be taken during the process of batik.

- _____
- _____ (2)

e. Which fabric would you recommend for the batik mural? Why?

_____ (2)

This question continues on next page.


f. Would you recommend natural, synthetic dyes or a combination of both? Why?
_____ (1)

g. Give **TWO** examples of:

i) Primary colours: _____

ii) Secondary colours: _____ (2)

h. In the box below, design an oriental inspired pattern suitable for the batik mural, and label the colour scheme based on a set of complementary colours.



(4)

i. Name **TWO** hand-embroidery stitches that could be used to decorate the design in part (h).
_____ (1)

j. Outline **ONE** advantage and **ONE** disadvantage of computer-controlled embroidery.

Advantage: _____

Disadvantage: _____ (2)

(Total: 20 marks)

MATRICULATION AND SECONDARY EDUCATION CERTIFICATE EXAMINATIONS BOARD
UNIVERSITY OF MALTA, MSIDA

SECONDARY EDUCATION CERTIFICATE LEVEL

MAY 2017 SESSION

SUBJECT:	Textiles and Design
PAPER NUMBER:	IIB
DATE:	11 th May 2017
TIME:	4:00 p.m. to 6:05 p.m.

Answer **ALL** questions.

SECTION A (40 marks)

1a. Steam irons are a useful appliance in the home. Identify **TWO** uses of steam irons. An example has been given.

- A steam iron removes creases from fabric.

- _____

- _____ (2)

b. To ensure safety and care, suggest **ONE** way how to:

- i) use a steam iron;

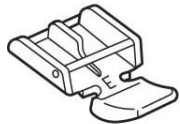

_____ (1)

- ii) store a steam iron.

_____ (1)

(Total: 4 marks)

2a. Name the sewing machine attachments that are needed for the following purposes. The pictures will help you out.

Purpose	Picture	Name of attachment
To sew a zip		
To neaten the edges of a seam		

(1)

This question continues on next page.

b. Give **TWO** guidelines that tailors should consider when using a button hole foot.

- _____
- _____ (2)

(Total: 3 marks)

3a. What are natural fibres? Name **TWO** natural fibres.




Name 1: _____ Name 2: _____ (2)

b. Give **TWO** advantages of using cotton socks instead of polyester socks.

- i) _____

- ii) _____
 _____ (2)

c. A pair of cotton socks have the labels below. Give the meaning of **EACH** label.

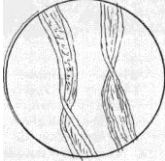
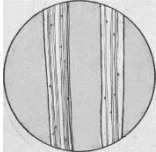
 <i>Source: www.ec.europa.eu/</i>	Meaning: _____ _____
 <i>Source: www.siebenblau.de</i>	Meaning: _____ _____
 <i>Source: www.google.com</i>	Meaning: _____ _____

(3)

d. Which of the following fabric finishes is used on cotton to make it smoother and more lustrous? Circle the correct answer.

Calendaring Mercerizing Bleaching (1)

e. Choose the microscopic view that shows cotton before applying the fabric finish mentioned in part (d).

 <i>Source: www.chestofbooks.com</i>	 <i>Source: www.chestofbooks.com</i>
Diagram A	Diagram B

Answer: _____ (1)

f. Cotton can be given an easy care chemical finish.

i) What is an easy care fabric finish?

_____ (1)

ii) Give **ONE** advantage and **ONE** disadvantage of the easy care treatment.

Advantage: _____

Disadvantage: _____

_____ (2)

(Total: 12 marks)

4a. The diagram below shows a uniform made from phosphorescent textiles which glow in the dark. Suggest **TWO** other examples how these fabrics could be used in garments.


i) _____

ii) _____ (2)



This question continues on next page.

b. As illustrated below, geotextiles are widely used in engineered landfills. Fill in with the definition of geotextiles.



Source: www.cirtex.co.nz

Geotextiles are _____ fabrics which, when used in association with _____, have the ability to separate, filter, reinforce, protect, or drain.

(1)

c. Polyester is used for geotextiles made of synthetic fibres. Outline **TWO** characteristics of polyester that make it suitable for this use.

- _____
- _____ (2)

d. From the box below, tick **ONE** test that should be applied to polyester to check if the fabric tears, giving a reason for your choice.

- Fire retardant
 - Abrasion resistance
 - Waterproof
 - Colour fastness

Reason: _____

(2)

(Total: 7 marks)

5. Observe the coat illustrated in the box below and answer the following questions:



- a. Name of coat: _____ (1)
- b. Name of pockets: _____ (1)
- c. Name of sleeves: _____ (1)
- d. Is it a single or a double-breasted coat? _____ (1)
- e. Fleece lining was used for this coat. Give a reason why this lining is suitable for the above coat.
_____ (1)
- f. Name the following label found on this coat, and explain its meaning.



Name: _____

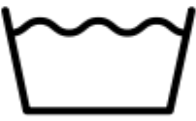



Meaning: _____

Source: www.all-free-download.com

_____ (2)

- g. Outline **THREE** properties of wool that make it suitable for this coat.
 - _____
 - _____
 - _____ (3)

- h. In the following table, complete the **FOUR** care label symbols to show how to care for the above coat.

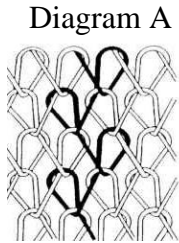
(4)

(Total: 14 marks)

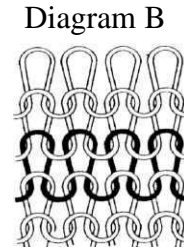
Please turn the page.

SECTION B (60 marks)

6a. Diagram A represents warp knitting fabric.



Source: www.en.wikipedia.org




Source: www.iso.org

i) Do you recommend this type of knitting for ladies' stockings or tailored women's jackets? Why?

_____ (1)

ii) Name the type of knitting illustrated in Diagram B. _____ (1)


b. The diagram below illustrates a knitted and a woven pair of trousers for children. Identify **TWO** advantages of buying knitted trousers for children.



Advantage 1: _____

Advantage 2: _____ (2)

c. From the sewing machine needles illustrated below, choose **TWO** that are suitable for knitted fabrics. Give **ONE** reason for your choice.



Source: www.en.wikipedia.org

Needle 1: _____

Needle 2: _____


Reason: _____ (3)

- d. Suggest **ONE** safety precaution that should be considered when fitting a sewing machine needle to a sewing machine. An example has been provided.

Example: Switch off the sewing machine to ensure that no electricity will pass through.

Precaution: _____ (1)

- e. From the diagram below, choose **ONE** suitable sewing machine stitch for knitted fabrics. Justify your choice.



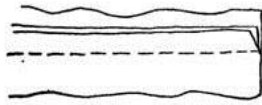
Source: www.crafts.tutsplus.com

Stitch: _____

Reason: _____ (2)

This question continues on next page.

- f. From the seams illustrated below, choose **ONE** seam that is suitable for sewing the side seams of a sports jacket. Give **ONE** reason to justify your choice.



Plain seam



French seam



Corded seam

Source: www.sewingmachinejudge.com

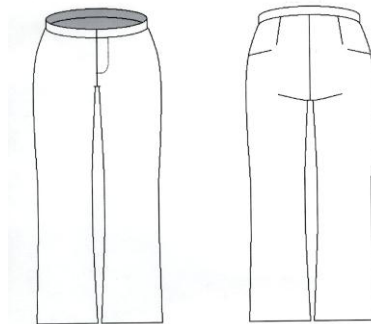
Name of seam: _____

Reason: _____ (2)

- g. Suggest **ONE** way how to prevent shoulder seams from stretching.

_____ (1)

- h. Make **TWO** changes to the pair of trousers shown below so that a wheelchair user would be able to put them on and off easily. Label the changes in the diagram. Give a reason for each change.



Source: www.en.fashionfreaks.se

Change 1: _____

Reason: _____

Change 2: _____

Reason: _____ (5)

- i. Name **ONE** blended fabric that could be used for the trousers mentioned in part (h). Give **ONE** advantage of blended fabrics.

Name of fabric: _____

Advantage: _____ (2)

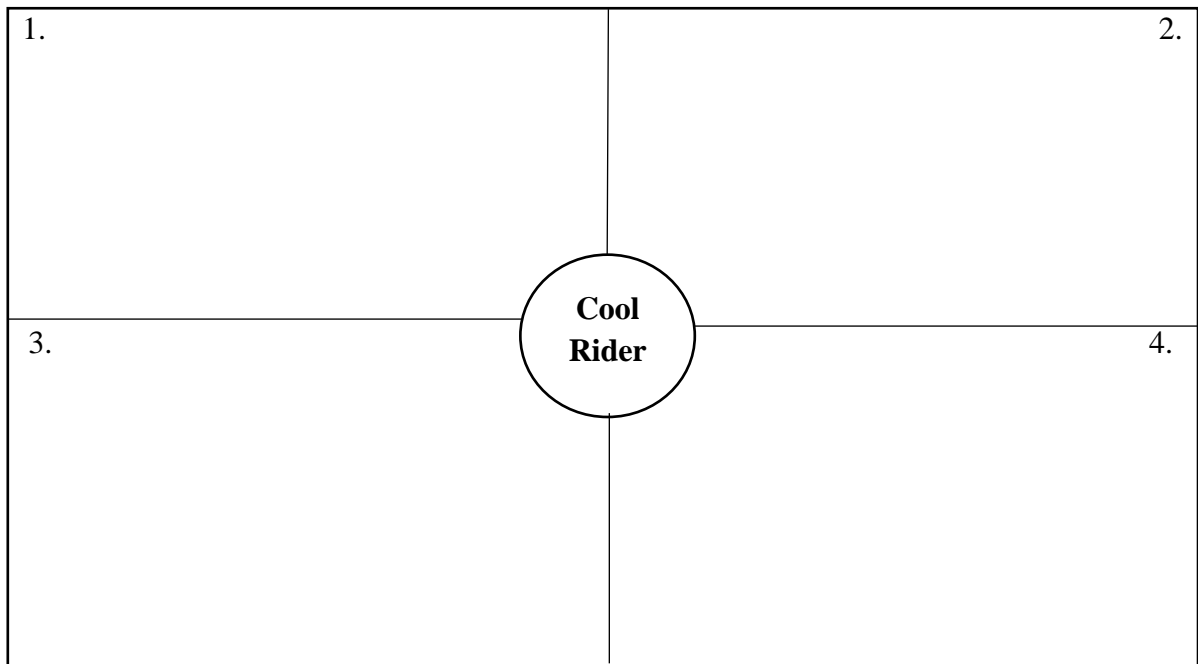
(Total: 20 marks)

7. You are asked to design a mood board for a boys' caps and scarves collection with the theme of a cool rider to promote sports such as cycling, skateboarding and wheelchair basketball.

a. What is a mood board?

_____ (1)

b. In the mood board below, draw **FOUR** ideas to develop the theme cool rider, and describe how each idea could be used for the collection.



Use of idea 1: _____

Use of idea 2: _____

Use of idea 3: _____

Use of idea 4: _____ (4)

c. How would you make the front of the cap easy to find for a person with eyesight (visual) impairment?

_____ (1)

This question continues on next page.

d. Define haute couture and prêt-à-porter.

Haute couture: _____

Prêt-à-porter: _____

_____ (2)

e. State **TWO** advantages of buying caps and scarves from clothes shops and from online stores.

Clothes shops:

Advantage 1: _____

Advantage 2: _____

Online stores:

Advantage 1: _____

Advantage 2: _____ (4)

f. Identify **TWO** methods of payment that could be used when buying scarves and caps from a clothes shop. Give **ONE** advantage and **ONE** disadvantage for **EACH** method of payment.

Method of payment 1: _____

Advantage: _____

Disadvantage: _____

Method of payment 2: _____

Advantage: _____

Disadvantage: _____ (6)

g. Why is it important for a card holder to:

i) sign the card as soon as it is received?

ii) store it away from the personal identification number (PIN)?

_____ (2)

(Total: 20 marks)

8a. What is batik?

_____ (1)

b. Use the words in the box below, and fill-in the blanks to explain the process of batik.

removed cloth peeling wax dye-bath water second heating

i. _____ is put over the outline of the pattern. The _____ is dyed.

ii. A _____ layer of wax is put. The cloth is dyed in the _____ for the second time.

iii. All the wax is _____. This is done by _____ the wax and _____ it off and also by applying boiling _____ and sponging off the remaining wax.

(4)

c. Name the tools shown below which are used during the production of batik.



Source: www.makeyourown.org.uk





Source: www.frutodearte.com

i) _____

ii) _____

(1)

d. List **ONE** safety precaution for each step in the making of batik as shown below.

<p>i)</p> 	<p>Safety precaution: _____</p> <p>_____</p>
<p>ii)</p> 	<p>Safety precaution: _____</p> <p>_____</p>

(2)

This question continues on next page.

e. Would you recommend cotton or polyester for batik? Why?

_____ (2)

f. Give **ONE** safety precaution that should be taken when storing batik dyes.

_____ (1)

g. What type of colours are the following:

i) yellow and blue; _____

ii) green and orange. _____ (2)

h. In the box below, design a pattern suitable for a tie or a bow tie to be made with batik. Label the diagram where you will use **TWO** complementary colours.



(4)

i. Many patterns can be created by using different embroidery stitches. Give **TWO** examples of hand-embroidery stitches.

_____ (2)

j. State **ONE** disadvantage of machine embroidery.

Disadvantage: _____ (1)

(Total: 20 marks)